

Anjuman-I-Islam's
Kalsekar Technical Campus
School of Pharmacy
F.Y. B.Pharm (Sem I)
Theory, Reperiodic

Sub: - Organic Chemistry-I

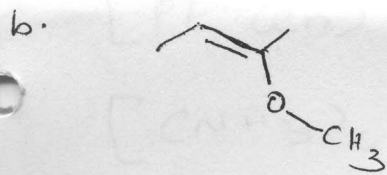
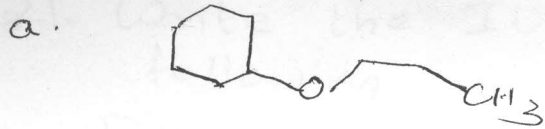
Date: - 6.3.12

Time: - 2:00-3:00 pm

Marks: - 10

Q.1. Give IUPAC nomenclature of: -

(2)



Q.2. Give suitable structures of

(2)

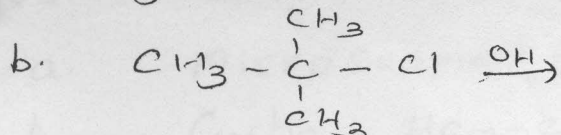
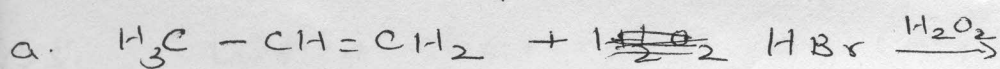
- 2-methoxycyclohexanol
- 2,2-dimethyl-1-propanol

Q.3. Give one example of the following (any three) (3)

- Dehalogenation of vicinal halide
- Hydration of alkynes
- Oxymercuration-Demercuration
- Addition of Hydrobromic acid (Markonikov rule)

Q.4. Write the products of

(2)



Q.5. Explain following conversion

(1)

