

136

Q.P. Code : 546202

( 3 Hours)

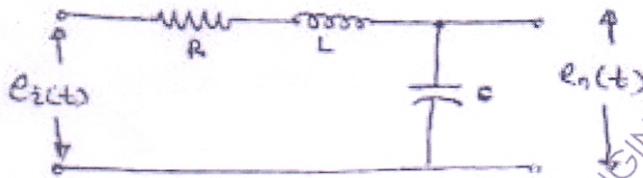
[Total Marks : 100

- N.B. : (1) Question No. 1 is compulsory.  
 (2) Answer **any four** out of remaining **six** questions.  
 (3) **Figures** to the **right** indicate **full** marks.  
 (4) Assume suitable data if necessary.

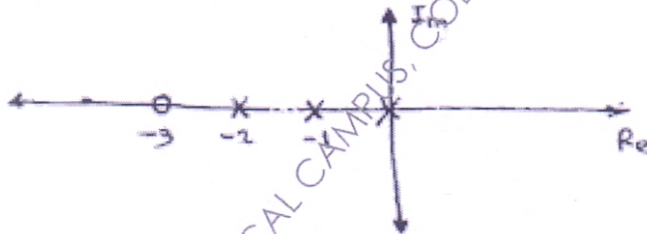
1. Answer the following :-

- (a) Explain the concept of relative stability.  
 (b) What do you mean by frequency domain analysis and explain the frequency domain performance indices.  
 (c) Find out the T.F. of the given network.

20

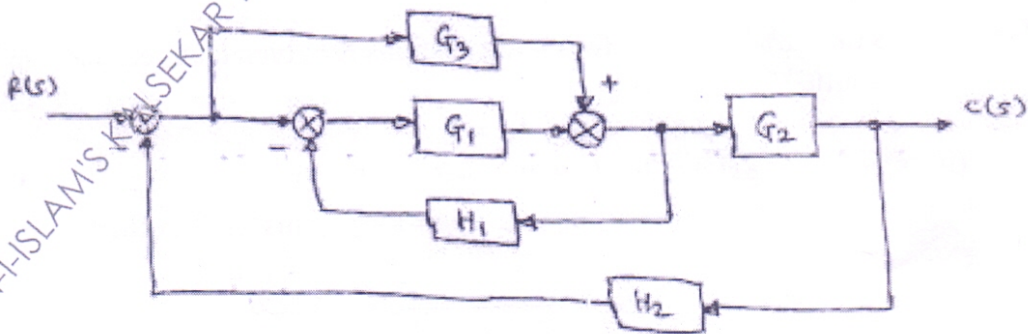


- (e) The forward path gain of a system is 2.5 and Pole-zero configuration of the system is shown below, find the overall transfer function and type of the system for unity feedback.



2. (a) Reduce the block diagram and obtain its transfer function.

10



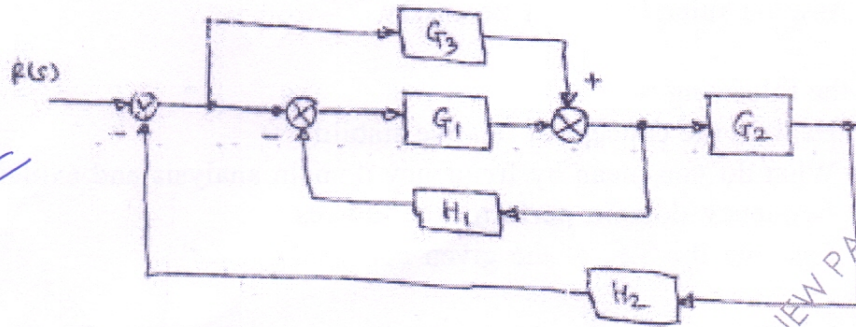
TURN OVER

MUPD16025 ANJUMAN-HISLAM'S KALSEKAR TECHNICAL CAMPUS, COLLEGE OF ENGINEERING, NEW PANVEL 10-06-2016 13:40:09

Q.P. Code : 546202

2

- (b) Draw the corresponding signal flow graph of given block diagram and find  $\frac{C(s)}{R(s)}$  10



9820874942  
Shamila P.

3. (a) State and prove properties of state transition matrix and check controllability and observability for the system. 10

$$\dot{x} = \begin{bmatrix} 0 & 6 & 5 \\ 1 & 0 & 2 \\ 3 & 2 & 4 \end{bmatrix} x + \begin{bmatrix} 0 \\ 1 \\ 2 \end{bmatrix} u$$

$$y = [1 \quad 3 \quad 0]x$$

- (b) A unity feedback system has - 10

$$G(s) = \frac{40(s+2)}{s(s+1)(s+4)}$$

- Determine : (i) Type of the system  
(ii) All error coefficients  
(iii) Error for ramp input with magnitude 4.

4. (a) Discuss the stability of the following systems for given characteristic equation using Routh-Hurwitz criterion. 10

(i)  $s^6 + 4s^5 + 3s^4 + 16s^2 - 64s - 48 = 0$

(ii)  $s^6 + 2s^5 + 8s^4 + 12s^3 + 20s^2 + 16s + 16 = 0$

- (b) A feedback control system has an open-loop transfer function. 10

$$G(S) = \frac{K}{S(S+3)(S^2+2S+2)}$$

Find the root-locus as  $k \rightarrow 0$  to  $\infty$

TURN OVER

MUPD16025 ANJUMAN-UL-ISLAMIA AL-BEER TECHNICAL CAMPUS, COLLEGE OF ENGINEERING, NEW PANVEL 10-06-2016 13:40:41

5. (a) For a particular unity feedback system,

10

$$G(S) = \frac{242(s + 5)}{s(s + 1)(s^2 + 5s + 121)}$$

Sketch the Bode plot and find  $W_{gc}$ ,  $W_{pc}$ , G.M., P.M. and comment on stability.

- (b) For a certain control system

10

$$G(s).H(s) = \frac{K}{s(s + 2)(s + 10)}$$

Sketch the Nyquist plot and hence calculate the range of K for stability.

6. (a) Explain the frequency domain specifications. 20  
(b) Explain the concept of Neuro-Fuzzy adaptive control system.  
(c) Write short note on : Steady state errors in feed back control system and their types.

NEW PANVEL 10-06-2016 13:40:49  
AMPUS, COLLEGE OF ENGINEERING

Course: S.E (All Branches)

QP Code 546202

Correction

Please note the Corrections in question paper Q.P. code 546202 as follows.

1. Paper is of 80 marks.
2. Instructions to students :
  - 1) Q.1 is compulsory
  - 2) Answer **any Three** from remaining **five** questions.

Date and Time 10/06/2016 03:00 PM

Block No. 13	[ ETC 4102 ETC 4105 ]	<del>Beikh</del> <del>M.A.</del>	]	GA 10/06/16
12	[ ETC 4093 ETC 4091 ]	Adama Amis	]	Am 10-6-16
11	[ ETC 4077 ETC 4078 ]	Rubana Pathi <del>Sathya</del>	]	Am 10/6/16
10	[ ETC 4068 ETC 4064 ]	<del>Amal</del> Arijit	]	Am 10/6
09	[ ETC 4053 ETC 4050 ]	Hussain Abubakar	]	Am 10/6/16
08	[ ETC 4046 ETC 4047 ]	Sachin Neha	]	Am 10/06